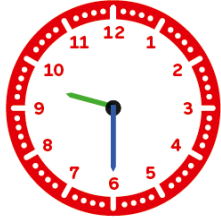


1. Écris l'heure de l'horloge.



Il est ... h ... min.



Il est ... h ... min.



Il est ... h ... min.



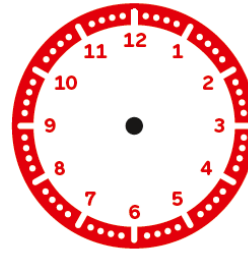
Il est ... h ... min.




Il est ... h ... min.



Il est ... h ... min.



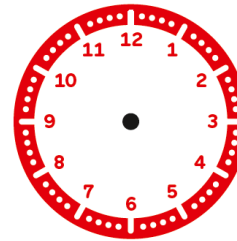
Il est 5 h.



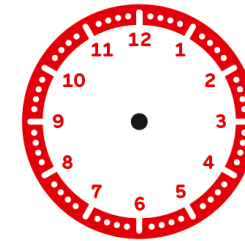
Il est 3h30.



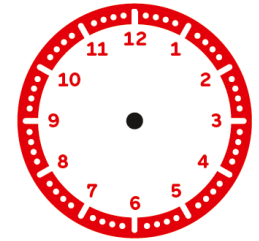
Il est 10h30.



Il est 8 h 45.



Il est 4 h 30.



Il est 2 h 15.



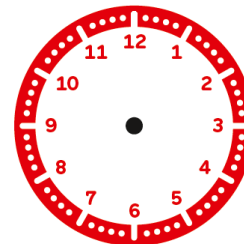
Il est ... h ... min.



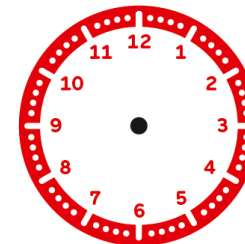
Il est ... h ... min.



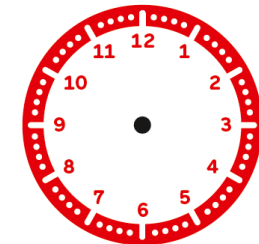
Il est ... h ... min.



Il est 4 h 40.



Il est 3 h 20.



Il est 5 h 50.